

1. Work out $172.8 + 54.63$
(1 mark)2. Work out $86.3 - 67.46$
(1 mark)3. Work out 1.3×3.5
(2 marks)4. Work out $\text{£}10.28 \div 4$
(2 mark)

5. Round 15.6374 to the nearest 1 dp

.....
(1 mark)6. Work out $7 - (-15)$
(1 mark)7. $\frac{2}{3}$ of x is 18, what is x ?.....
(1 mark)

8. Find 40% of 183

.....
(1 mark)9. Convert $\frac{5}{3}$ to a decimal.....
(1 mark)10. Calculate $10^3 - 10^2$
(2 marks)11. Write down the n th term $2, 0, -2, -4, -6$
(2 marks)

12. Simplify

 $\frac{36}{40}$
(1 mark)

Name : Class..... Score.....

13. Simplify $5x + 3x^2 - 5x - 5x^2$

.....
(2 mark)

14. Work out $7m \times \square = 49mn^2$

.....
(1 mark)

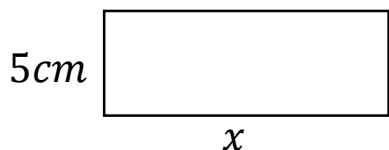
15. Expand and simplify
 $4(2a + 6) - 3(a + 2)$

.....
(2 marks)

16. What is the HCF of 24 and 32

.....
(2 marks)

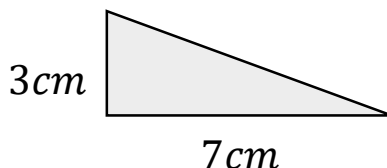
17. Calculate x



Perimeter = 28cm

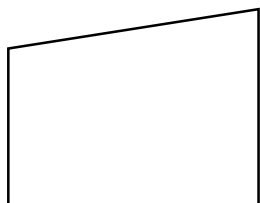
.....
(1 mark)

18. Calculate the area



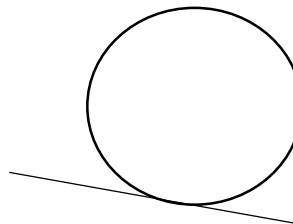
.....
(2 mark)

19. Name this shape



.....
(1 mark)

20. Name this part of a circle



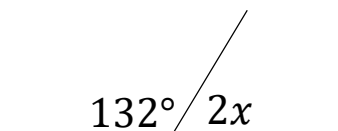
.....
(1 mark)

21. Draw all the lines of symmetry



.....
(1 mark)

22. Calculate x



$x =$

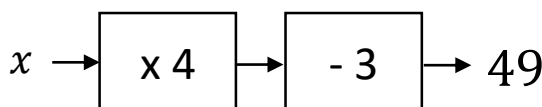
(2 marks)

23. Workout

$2 \times 4^2 - 3 \times 5$

.....
(2 marks)

24. Solve



$x =$

(1 mark)